

**SUMMER VACATIONS HOLIDAYS HOMEWORK (2021-22)**  
**CLASS III**


**Dear Students**

**It's time for a short break....your much awaited Summer Vacations.  
But they are a little different this time. So .....**

- ❖ **Get up early in the morning and do some breathing exercises.**
- ❖ **Eat plenty of good food.**
- ❖ **Relax and take care of people in your family.**
- ❖ **Stay indoors and play indoor games.**
- ❖ **Try to plant small saplings and make your surroundings look beautiful and green.**
- ❖ **Follow the basic steps for maintaining good hygiene.**
- ❖ **Read this short comic which has been developed especially for you.**

**[https://www.mohfw.gov.in/pdf/Corona\\_comic\\_PGI.pdf](https://www.mohfw.gov.in/pdf/Corona_comic_PGI.pdf)**

**Few activities have been designed for you in different subjects by your teachers. Do these activities as directed and have lots of fun.  
Remember to STAY SAFE.**



## **ENGLISH**

- 1. Poster Making Activity: Design a poster on an A4 sized sheet on the theme “Water-- the elixir of life, Save Water, Save Life”. Write a self composed slogan on the poster. Upload the same on Google Classroom.**

**[Rubrics - Design & Layout, Creativity and Presentation of theme]**

- 2. Coffee with Grandparents: Students will have a formal conversation with their grandparents with a set of questions asking them about their childhood experiences . They will record a video clip of not more than 2 mins and upload the same on Google Classroom.**

**[Rubrics - Video clip quality, Setting and Presentation of ideas (content & vocabulary)]**

- 3. Let’s Write and Write Beautifully: Practice one page of handwriting in a four-lined notebook daily. Make a separate handwriting notebook and upload five pages as a single scanned PDF on Google Classroom.**

**[Rubrics - Neatness, Level of Improvement & Uniformity in Letter Formation**

**]**

## HINDI

### ग्रीष्मावकाश कार्य

(1) जीव-जंतुओं पर आधारित किसी एक शिक्षाप्रद कहानी का चयन कीजिए। उस कहानी को A4 साइज़ शीट पर चित्र सहित लिखें।

(2) प्रकृति से संबंधित कोई एक स्वरचित कविता लिखिए और हाव भाव सहित सुनाते हुए वीडियो भी बनाएँ।

## Mathematics

### NOTE:

- Do the following questions in a thin notebook or sheets (as comfortable)
- Solve the following worksheets having three levels

### Level 1

1. Fill in the blanks

- The largest three digit number is \_\_\_\_\_
- The smallest four digit number is \_\_\_\_\_
- The number just before 2000 is \_\_\_\_\_
- A Number that comes just after a given number is called its \_\_\_\_\_
- 1 ten = \_\_\_\_\_ ones
- 1 hundreds = \_\_\_\_\_ tens
- 10 hundreds = \_\_\_\_\_ thousand
- The place value of 5 in 6538 is \_\_\_\_\_

2. Write the number name: -

- 9565
- 7300

3. Write the numerals
- Six thousand seven hundred ninety five: \_\_\_\_\_
  - Four thousand five: \_\_\_\_\_

4. Complete the pattern given
- 4017, 4027, 4037, \_\_\_\_\_, \_\_\_\_\_, \_\_\_\_\_
  - 1121, 1131, 1141, \_\_\_\_\_, \_\_\_\_\_, \_\_\_\_\_

5. Write the successor and predecessor of the following

Number	Successor	Predecessor
5950		
3999		
9907		
7001		

6. Show on the abacus
- 3015
  - 5423
  - 2006
  - 1824
7. Encircle the largest number
- 8767, 7676, 6767, 8787, 7867
  - 4008, 4800, 4080, 4088, 4808
8. Encircle the smallest number
- 7502, 7052, 7250, 7520, 7025
  - 3001, 3100, 3101, 3111, 3002

9. Write the greatest and the smallest 4 digit number by using the given digits

Digits	Greatest number	Smallest number
7, 1, 6, 5		
5, 3, 0, 9		

10. Fill in the blanks using  $<$  or  $>$

a.  $1359$  \_\_\_\_\_  $650$

b.  $2643$  \_\_\_\_\_  $5818$

c.  $3148$  \_\_\_\_\_  $3146$

d.  $7326$  \_\_\_\_\_  $7456$

11. Add the following

a.

	Th	H	T	O
+	3	4	6	1
	5	1	2	8

---

---

b.

	Th	H	T	O
+	5	4	1	5
	2	2	1	3

---

---

12. Add the following

a.	Th	H	T	O
	1	0	5	9
+		4	6	3
			2	9
<hr/>				
<hr/>				

b.	Th	H	T	O
		4	1	3
+	7	8	2	1
			5	1
<hr/>				
<hr/>				

13. Arrange in columns and add the following

a. 7284 and 1926

b. 5421 and 4350

14.  $551 + 10 = \underline{\hspace{2cm}} + 551$

15.  $155 + \underline{\hspace{2cm}} = 155$

## Level 2

- 100 less than 1100 is \_\_\_\_\_
- The smallest number using the digits 0, 1, 5, 9 is \_\_\_\_\_
- Write the following numbers in expanded form in two ways
  - 3956
  - 9045
- Write the place value of 7 in each of the following:
  - 7194
  - 4087
  - 8702
  - 3670
- Put the correct sign  $<$ ,  $>$  or  $=$ 
  - $49 + 10$  \_\_\_\_\_  $59$
  - $1689$  \_\_\_\_\_  $999$
  - $4204$  \_\_\_\_\_  $4000 + 200 + 10 + 4$
  - $2080$  \_\_\_\_\_  $2008$
- Write numerals for
  - Seven thousand four hundred forty
  - Nine thousand ninety
- Write numerals for
  - $1000 + 800 + 7$
  - $9000 + 600 + 30 + 2$
- Arrange in descending order
  - 6080; 6800; 6008; 8060
- Arrange in ascending order
  - 3871; 3781; 3718; 3178
- Arrange in columns and add the following
  - 2187, 2539, 425
  - 3453, 1879, 112
- The sum of 250, 300 and 600 is \_\_\_\_\_
- When we add 10 to 836 the digit at \_\_\_\_\_ place increases by 1
- 10 more than 2980 is \_\_\_\_\_

14. Complete the pattern

a. 5147, \_\_\_\_\_, 5149, \_\_\_\_\_, \_\_\_\_\_, 5152

b. 1296, \_\_\_\_\_, 1298 \_\_\_\_\_, \_\_\_\_\_, 1301

15. In 82 hundreds there are \_\_\_\_\_ thousand

### Level 3

1.  $900 + 1000 + 1 =$  \_\_\_\_\_

2. The place value of zero is \_\_\_\_\_

3. The predecessor of smallest 3 digit number has \_\_\_\_\_ digits

4. \_\_\_\_\_ hundreds make one thousand

5. When we change the order of number while adding the \_\_\_\_\_ does not change

6. The smallest four digit number using different digits is \_\_\_\_\_

7. 2000 added to 5500 will give \_\_\_\_\_

8. Write the number which is 376 more than the greatest 3 digit number

9. Which place should we compare to determine the greater of the given numbers 7295 and 7259?

10. Put  $>$ ,  $<$  or  $=$

a.  $5000 + 600 + 2$  \_\_\_\_\_ Five thousand two

b.  $8000 + 6$  \_\_\_\_\_  $7000 + 1000 + 6$

c.  $1000 + 200$  \_\_\_\_\_  $2000 + 100$

11. In a three digit number the place value of 5 is 50, the place value of 8 is 800 and ones place is 2 less than the tens place. What is the number?

12. I am a four digit number. All my digits are the same. Sum of four digits is 32. Who am I?

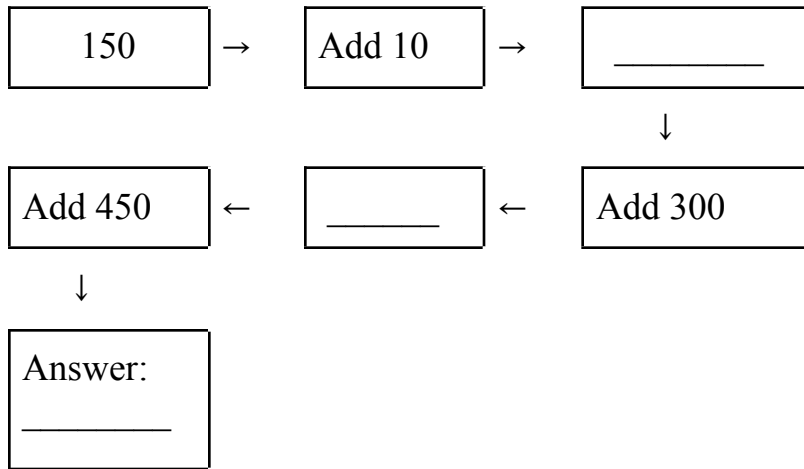
13. Add and write the answer in words

a.  $5436 + 67$

b.  $453 + 2090$



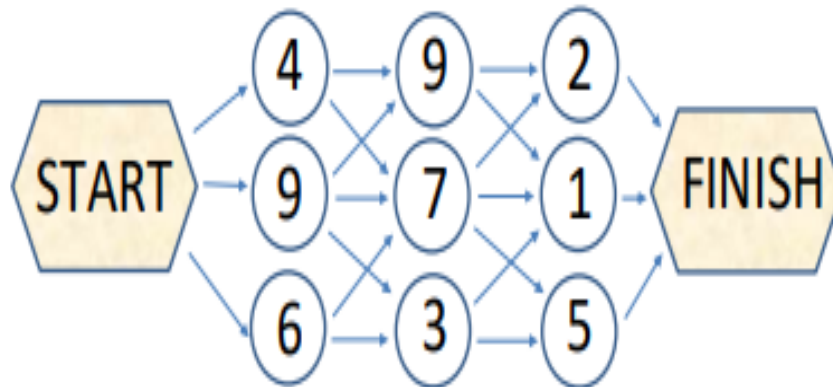
14. Do as directed



15. Find the number in which the digit at thousands places is between 8 and 10, one place is 7 less than 9. Tens place is 2, hundreds place is 4 more than 5.



## FOLLOW THE PATH PUZZLE 1



- Start at the start hexagon.
- Follow the route of one of the arrows each time, adding up the numbers as you go.

### Challenge 1

Can you find a route which makes a total of 20?

Shade it in.

### Challenge 2

Can you find the route which makes the biggest total?

Biggest total \_\_\_\_\_

Can you find the route which makes the smallest total?

Smallest total \_\_\_\_\_

## Puzzle 2

### NUMBER CROSSWORDS - MAKE 20

Draw lines of 3 numbers that add together to make 20.

The lines can be horizontal, vertical or diagonal.

4	2	7	6	5
9	<del>6</del>	<del>10</del>	<del>4</del>	8
10	5	3	6	7
2	9	7	10	3
8	6	11	4	1

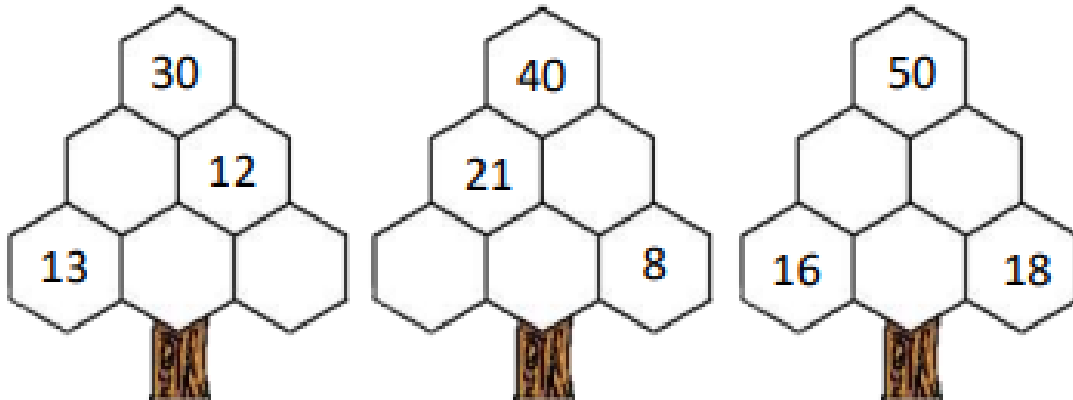
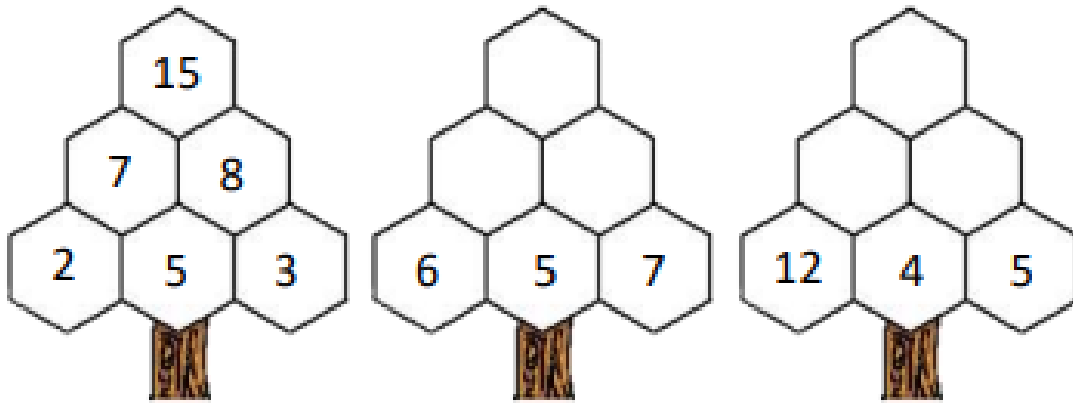
*There are 10 different totals of 20 to find - how many can you spot?*

What is the highest total of 3 numbers in a line you can find? \_\_\_\_

What is the lowest total of 3 numbers in a line you can find? \_\_\_\_

### TREE ADDING PUZZLE 3

- Each number is the total of the two numbers below it.
- Find a solution for each of the trees below! There are many possibilities!
- The first tree has been completed for you.



## SOCIAL SCIENCE

Kindly complete the following work neatly on coloured A4 sheets and decorate it nicely.

Make a beautiful and colourful family album----

**A** Paste the photographs of the following family members

- a) Yourself
- b) Parent
- c) Siblings
- d) Grandparents ( both maternal and paternal )
- e) Uncles ( both maternal and paternal )
- f) Aunts ( both maternal and paternal )
- g) Cousins

**B** Also write this information along with the photographs:

- a) Name
- b) Date of birth
- c) Residence
- d) Favourite TV show
- e) Favourite food

**C** How every member of your family contributed during the lockdown period ?  
Explain with the help of pictures.

**Rubrics:**

- Content / knowledge
- Creativity
- Presentation

## **SCIENCE**

**1. Make Your Own Herbarium :** Collect the different fallen leaves from your surroundings. Put them in between the sheets of newspaper and dry them. Paste these leaves on A4 sheets with the help of a tape and write the name of the plant below it.

**2. Be a great friend to the environment. Make your own compost pot.**

Take a small pot. Put some soil in it. For two weeks, put all the wet waste produced from the kitchen in it cover it with soil again. Do not forget to put a little water in that pot on alternate days. Using a small plastic scale dig the soil in that pot after five weeks. Note down what changes you see in that pot. Click a picture of that pot before covering it with soil and another when you dig it after five weeks. Paste these pictures on an A-4 sheet.

**NOTE - Do the work of all subjects as directed by your teachers. Scan the work and upload on the respective subject folders on Google Classroom.**